





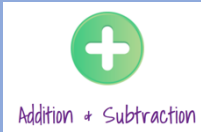
Post Learning:

 Addition + Subtraction	<p>Question 1: I can add ones to 3 digit numbers.</p>	<p>I feel</p>
<p>Add these amounts together:</p>		
<p>a) $207 + 1 =$ <input type="text"/></p>	<p>d) $245 + 7 =$ <input type="text"/></p>	
<p>b) $353 + 3 =$ <input type="text"/></p>	<p>e) $427 + 8 =$ <input type="text"/></p>	
<p>c) $319 + 5 =$ <input type="text"/></p>	<p>f) $299 + 3 =$ <input type="text"/></p>	

Post Learning:

 Addition + Subtraction	<p>Question 2: I can add tens to 3 digit numbers</p>	<p>I feel</p>
<p>Add these amounts together:</p>		
<p>a) $324 + 10 =$ <input type="text"/></p>	<p>d) $123 + 40 =$ <input type="text"/></p>	
<p>b) $189 + 10 =$ <input type="text"/></p>	<p>e) $395 + 10 =$ <input type="text"/></p>	
<p>c) $268 + 20 =$ <input type="text"/></p>	<p>f) $286 + 20 =$ <input type="text"/></p>	

Post learning:



Question 3:
I can add hundreds to 3digit numbers

I feel

Add these amounts together:

a) $110 + 100 =$

d) $105 + 200 =$


b) $290 + 100 =$

e) $456 + 300 =$

c) $328 + 200 =$

f) $109 + 120 =$

Post Learning:



Question 4:
I can use a written method to add amounts.


I feel

Show me how to work out:

$114 + 165 =$

$230 + 149 =$

Prior Learning:



Question 5:
I can use a written method to add amounts


I feel

Show me how to work out:

$$148 + 207 =$$

$$178 + 251 =$$

Prior Learning:



Question 6:
I am beginning to use a formal method to add 2 amounts together.

I feel

Complete these sums.:


a)

$$\begin{array}{r} 321 \\ + 236 \\ \hline \\ \hline \end{array}$$

b)

$$\begin{array}{r} 196 \\ + 542 \\ \hline \\ \hline \end{array}$$

Prior Learning:



Question 7:
I can make realistic estimates
of amounts .

I feel

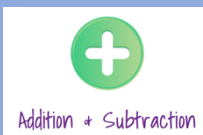
3 classes have been collecting milk lids to make a large sculpture.
Estimate how many milk lids have been collected in total.

Class 1
201

Class 2
314

Class 3
397

Prior Learning :

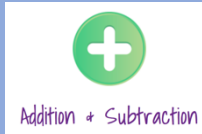


Question 8 :
I can solve addition sums that are laid
out differently.

I feel

$$= 17 + 56 + 4$$

Prior Learning :



Question 9 :
I can solve a word problem.

I feel

Samuel recorded how many days he walked to school every school year for three years . In Year 4 he walked 120 days , in Year 5 he walked 105 days and in Year 6 he walked 121 days. How many days did he walk in total?



days