






Prior Learning:

|   |  |                |
|---|--|----------------|
| <br>Addition + Subtraction | <b>Question 1:</b><br>I can add ones to 3 digit numbers. | I feel         |
| <p>Add these amounts together:</p>  |  |                |
| a) $123 + 1 =$  | <input type="text"/>                                     | d) $108 + 4 =$ |
| b) $245 + 4 =$  | <input type="text"/>                                     | e) $219 + 7 =$ |
| c) $302 + 7 =$  | <input type="text"/>                                     | f) $196 + 5 =$ |
|   |  |                |

Prior Learning:

|   |  |                 |
|---|--|-----------------|
| <br>Addition + Subtraction | <b>Question 2:</b><br>I can add tens to 3 digit numbers. | I feel          |
| <p>Add these amounts together:</p>  |  |                 |
| a) $113 + 10 =$   | <input type="text"/>                                     | d) $356 + 30 =$ |
| b) $256 + 10 =$   | <input type="text"/>                                     | e) $294 + 10 =$ |
| c) $165 + 20 =$   | <input type="text"/>                                     | f) $198 + 20 =$ |
|   |  |                 |

Prior Learning:



**Question 3:**

I can add hundreds to 3digit numbers.

I feel

Add these amounts together:

a)  $134 + 100 =$

d)  $367 + 200 =$

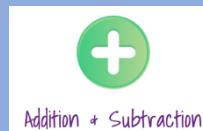
b)  $90 + 100 =$

e)  $201 + 200 =$

c)  $205 + 100 =$

f)  $336 + 110 =$

Prior Learning:



**Question 4:**

I can use a written method to add amounts.

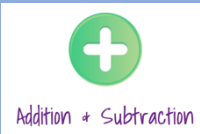
I feel

Show me how to work out:

a)  $161 + 112 =$

2)  $213 + 154 =$

Prior Learning:



**Question 5:**

I can use a written method to add amounts together.

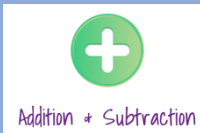
I feel

Show me how to work out:

a)  $87 + 59 =$

b)  $122 + 194 =$

Prior Learning:



**Question 6 :**

I am beginning to use a formal method to add 2 amounts together.

I feel

Complete these sums.:


a)

$$\begin{array}{r} 234 \\ + 161 \\ \hline \\ \hline \end{array}$$

b)

$$\begin{array}{r} 318 \\ + 263 \\ \hline \\ \hline \end{array}$$

Prior Learning:




**Question 7:**  
I can make realistic estimates  
of amounts when added.

I feel

Here are three class sizes below. Estimate how many children there are altogether.

$$22 + 39 + 32 =$$

Prior Learning :




**Question 8 :**  
I can answer sums laid out in different  
ways.

I feel

$$\boxed{\phantom{0000}} = 210 + 63$$

Prior Learning :



Question 9 :  
I can solve a word problem.

I feel

Harry, Logan and Briggi save their pocket money to go to a theme park together. They need £121. Here is what each child has saved so far.



£53



£25



£40

Do the children have enough money to go to the theme park?