


1) In a pack of football stickers, the ratio of normal stickers to special edition stickers is 8:2.

Daniel has 10 special edition stickers. How many normal stickers does he have?

2) The shop where the school order their pencils from has a deal. For every 80 pencils you order, you get a free pencil case. The school orders 600 pencils. How many pencil cases will they get?




3) Answer these questions

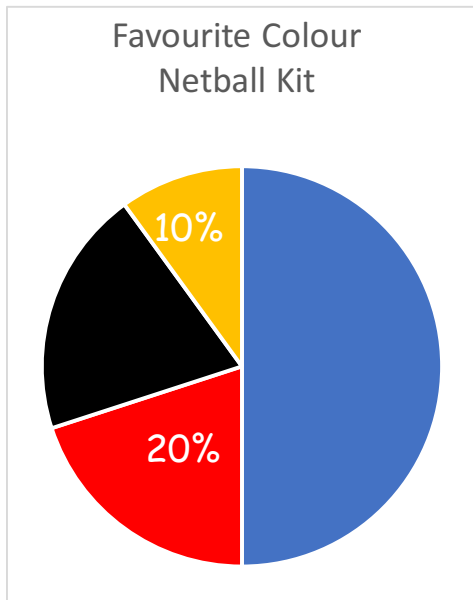
a) 75% of 600 =


b) 32% of £30.00

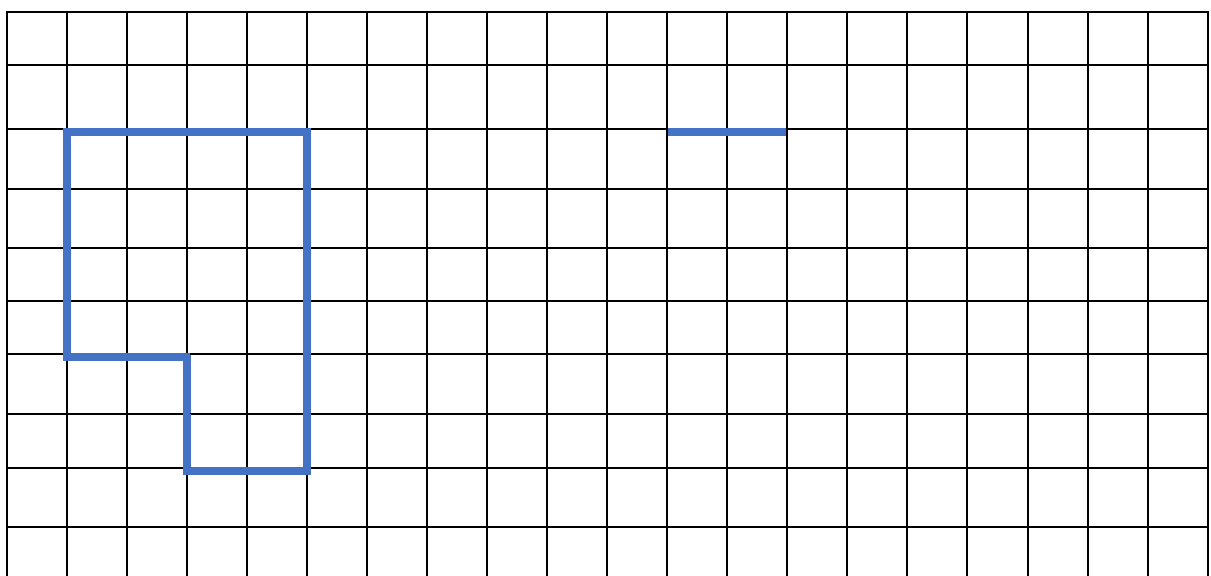

c) 15% x 320


4) The school netball team asked year 5 children to vote for their favourite colour kit so that they could wear a new uniform. In year 5 there are 90 children.

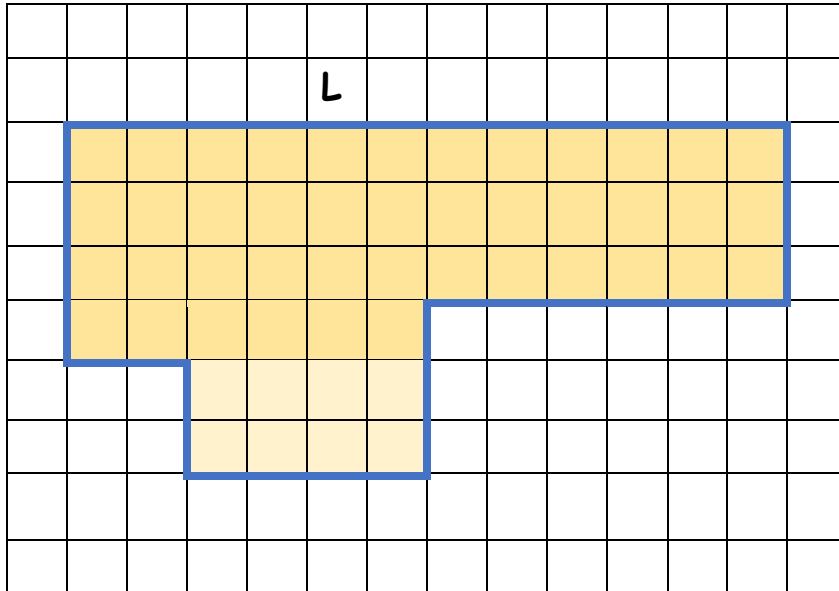
How many children voted for black uniform?




5) The design below is too large. Decrease the size of it using the scale factor 2:1. One line has been created to help you.



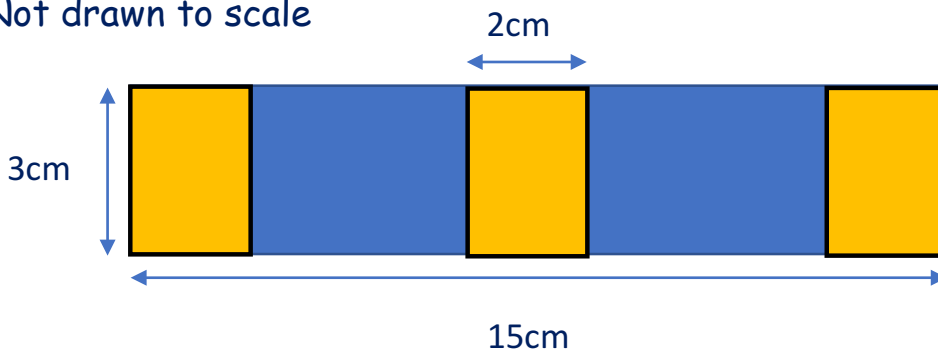
6) Here is a plan of a monkey enclosure in a zoo.  
Use the scale factor to help you to work out the missing length.



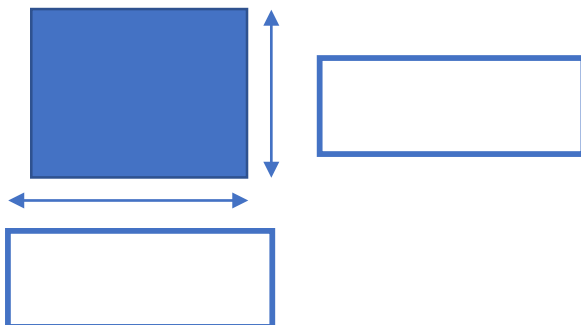
L =

7) This design has been created using 3 identical rectangles.

Not drawn to scale




Fill in the missing amounts



8) Sophie buys a bag of counters. There are 50 in the bag.

There **14 red** counters, **8 green** counters, **twice the number of blue** counters than green counters and the **same amount of black and white** counters.



How many white counters are there?

White =

9) A family of 3 have the combined age of 69 years.

Darcey is 29 years younger than mum.

Dad is 2 years older than mum.

How old is each person?

Darcey=

Mum=

Dad=

10) David wants to make a banana smoothie. The recipe that he has makes 750 ml of smoothie. He wants to make 1 litre.

**Banana Smoothie**


**makes 750 ml**

3 bananas

90g porridge oats

6 tablespoons natural  
yoghurt

600ml of water



10a) How many bananas does he need?

10b) How much water does he need?