





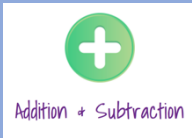
Post Learning:

 Addition + Subtraction	<b>Question 1:</b> I can use partitioning to mentally subtract by counting back.	I feel
<p>Calculate the answer to each sum.</p>		
a) $615 - 10 =$ <input type="text"/>	e) $756 - 110 =$ <input type="text"/>	
b) $180 - 30 =$ <input type="text"/>	f) $289 - 27 =$ <input type="text"/>	
c) $803 - 20 =$ <input type="text"/>	g) $700 - 120 =$ <input type="text"/>	
d) $564 - 12 =$ <input type="text"/>	h) $905 - 210 =$ <input type="text"/>	

Post Learning:

 Addition + Subtraction	<b>Question 2:</b> I can use rounding to help me to mentally subtract.	I feel
<p>Calculate the answer to each sum.</p>		
a) $84 - 9 =$ <input type="text"/>	c) $324 - 99 =$ <input type="text"/>	
b) $207 - 9 =$ <input type="text"/>	d) $126 - 19 =$ <input type="text"/>	

Post Learning:



**Question 3 :**

I can use rounding to help me to mentally subtract.

I feel

Calculate the answer to each sum.


a)  $86 - 11 =$

c)  $208 - 101 =$

b)  $178 - 11 =$

d)  $267 - 21 =$

Post Learning:



**Question 4:**

I can calculate the answer to subtraction sums by counting on to find the difference.

I feel

Calculate the answer to each sum.


a)  $67 - 51 =$

c)  $245 - 209 =$

b)  $125 - 112 =$

d)  $467 - 397 =$

Post Learning:



**Question 5:**

I can use a written method to subtract 2 amounts.

I feel

Show me how to work out:

a)  $568 - 216 =$

---


---

b)  $819 - 513 =$

---

---

Post Learning:



**Question 6:**

I am beginning to use exchanging when using a written method.


I feel

Complete these sums :

a)     H T O  
      3 4 8  
-     2 7 0  
                  
                

b)     H T O  
      6 0 7  
-     3 6 5

Post Learning:



**Question 7:**  
I can make realistic estimates.

I feel

Johnathon has £1000 in his savings. He wants to spend the following amounts to go on holiday. Estimate how much of his savings he will have left.

£389



on a holiday

£ 91




new clothes

£ 209



swimming with dolphins

Post Learning:



**Question 8:**  
I can chose the correct operation to use for missing number problems.

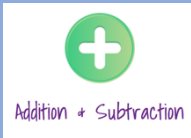
I feel

Fill in the missing boxes in these sums.

a)  $781 - \boxed{\phantom{000}} = 500$

b)  $\boxed{\phantom{000}} - 540 = 150$

Post Learning:



**Question 9 :**  
I can solve word problems.

I feel:

Tara has a party. She spends £12 on plates and cups, £10 pounds on prizes for games and £15 on decorations. She has a budget of £45. How much more money does she need to buy a cake which costs £17?