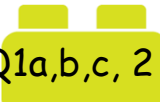












Question	Objective	Prior learning assessment	Post learning assessment
 Q1a,b,c, 2	I can find the value of amounts expressed with algebra symbols.		
 Q3	I know and use the formula to find the area of a rectangle.		
 Q4 a & b	I can use a formula to work out the total amount to a problem.		
 Q4c	I can explain how a formula has been used.		
 Q5a	I can complete a number sequence.		
 Q5b	I can describe the rule used in a number sequence.		
 Q6	I can use a rule to complete a number sequence.		
 Q7	I can find the value of one algebra symbol to help me to find the value of another.		
 Q8	I work out possible combinations of values and express theses algebraically.		
 Q9	I can find possible values for 2 missing amounts to balance an equation.		
 Q10	I can find the missing values in a product pyramid.		