















Area and Perimeter (Year 6)

Question	Objective	Prior learning assessment	Post learning assessment
 Q1	I can find the perimeter of shapes.		
 Q2	I can find the perimeter of shapes with missing amounts.		
 Q3	I can use a grid to help me to find the area of shapes.		
 Q4	I identify shapes with the same area and perimeter.		
 Q5	I know how to find the area of shapes using the formula for area.		
 Q6	I can solve problems involving area and perimeter.		
 Q7	I can calculate the area of triangles using the formula.		
 Q8	I can find the area of a parallelogram using the formula.		
 Q9	I can calculate the volume of a cuboid.		
 Q10	I can find the volume of a cuboid using an image to help me.		
 Q11	I understand the formula I need to use for the squared symbol.		
 Q12	I understand the formula I need to use for the cubed symbol.		